

The distribution of the amount of a customer's purchase at a convenience store is approximately normal, with mean \$15.50 and standard deviation \$1.72. Which of the following is closest to the proportion of customer purchase amounts between \$14.00 and \$16.00 ?

A 0.19

B 0.39

C 0.42



D 0.61

E 0.81

Answer C

Correct. The z -score associated with a purchase amount of \$14.00 is $z = \frac{14-15.5}{1.72} \approx -0.872$, and the z -score associated with a purchase amount of \$16.00 is $z = \frac{16-15.5}{1.72} \approx 0.291$. The area under the standard normal curve between -0.872 and 0.291 is approximately 0.42, so this is the approximate proportion of customer purchase amounts between \$14.00 and \$16.00.

The distribution of the number of moths captured per night by a certain moth trap is approximately normal with mean 103. If 28 percent of the captures fall below 76 per night, which of the following equations can be used to find σ , the standard deviation of the distribution?

A $0.28 = \frac{103-76}{\sigma}$

B $0.28 = \frac{76-103}{\sigma}$

C $-0.58 = \frac{103-76}{\sigma}$

D $-0.58 = \frac{76-103}{\sigma}$

E $0.58 = \frac{76-103}{\sigma}$



In the Dominican Republic in August, the distribution of daily high temperature is approximately normal with mean 86 degrees Fahrenheit ($^{\circ}\text{F}$). Approximately 95% of all daily high temperatures are between 83°F and 89°F . What is the standard deviation of the distribution?

A 1°F

B 1.5°F

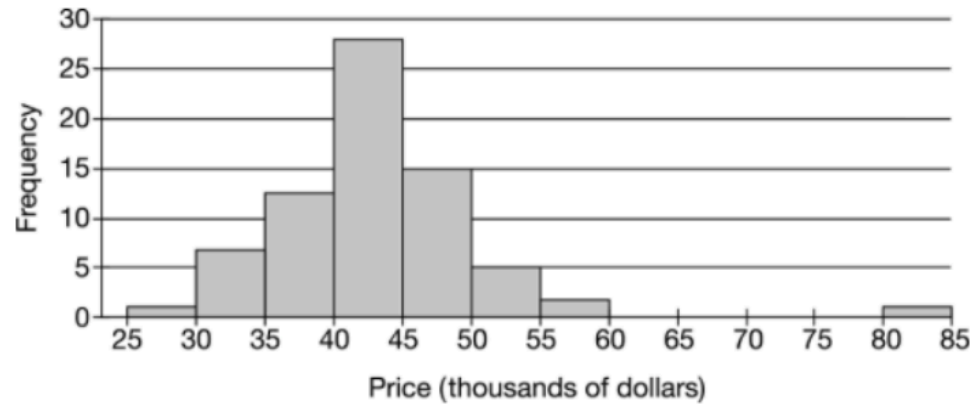
C 2°F

D 3°F

E 6°F



A reporter collected data on the purchase prices, in thousands of dollars, of 72 cars sold in a region. The following histogram summarizes the reporter's data.

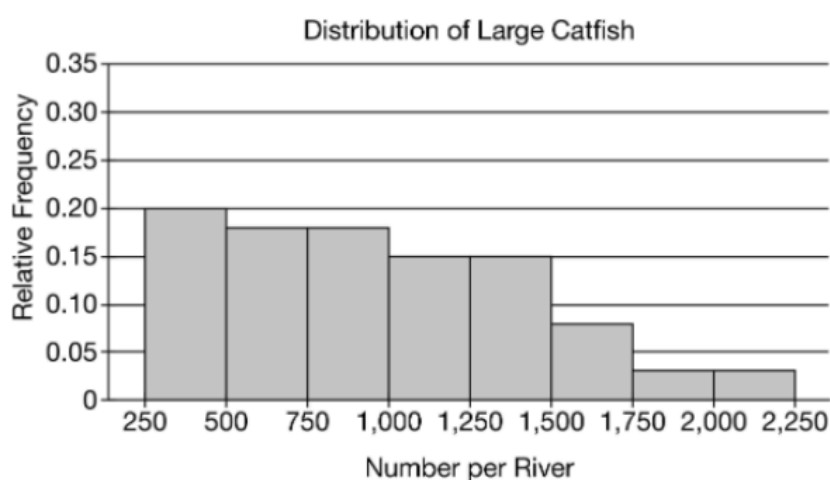
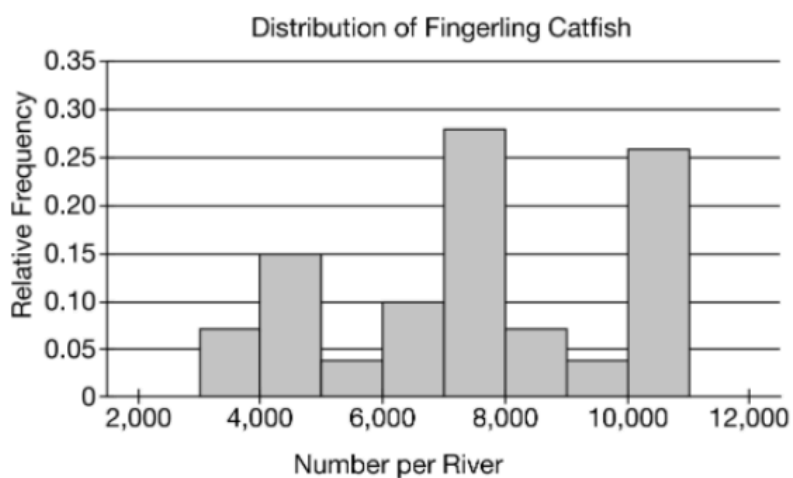


For a presentation on the data collected, the reporter used the median of the distribution to describe the typical purchase price. Which of the following might explain the use of median to describe the typical purchase price?

- A** There is an outlier between \$80,000 and \$85,000. Medians are resistant to outliers, while means are not.
- B** The number of observations that fall within a given interval is known. However, within each interval, the actual values are not known.
- C** The distribution is left skewed.
- D** The values represented in the histogram are in the thousands.
- E** The distribution is uniform.



Researchers studying catfish estimated the number of fingerling catfish and large catfish living in different rivers throughout the country. The following histograms summarize the relative frequency for each type of catfish.

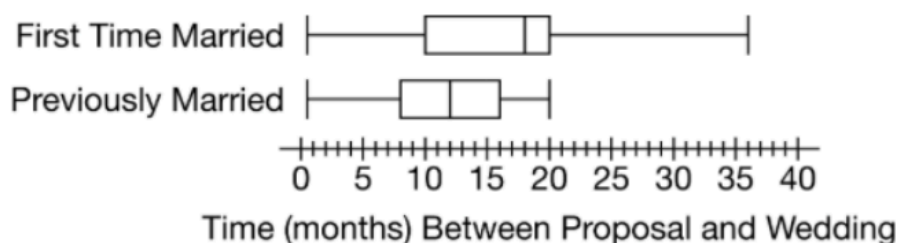


Based on the histograms, which of the following is the best comparison of the means and the ranges for the two distributions?

- A** The mean and range of the fingerling catfish are both equal to those of the large catfish.
- B** The mean and range of the fingerling catfish are both less than those of the large catfish.
- C** The mean and range of the fingerling catfish are both greater than those of the large catfish. ✓
- D** The mean of the fingerling catfish is equal to that of the large catfish, and the range of the fingerling catfish is greater than that of the large catfish.
- E** The mean of the fingerling catfish is equal to that of the large catfish, and the range of the fingerling catfish is less than that of the large catfish.

A sociologist studying marriage customs collected data on the length of time, in months, between the proposal and wedding. The following boxplot and table give the five-number summary for couples in which at least one person was getting married for the first time and for couples in which both people had been previously married.

Period	Minimum	Q1	Median	Q3	Maximum
First Time	0.5	10	18	20	36
Previously Married	0.5	8	12	16	20



Based on the summary statistics, which of the following statements is supported by the boxplots and table?

- A** The mean length of time for first-time couples is 18 months, and the mean length of time for previously married couples is 12 months.
- B** There is a gap between 20 and 36 for the first-time married distribution.
- C** Because both distributions have a minimum of 0.5 months, the distributions are skewed to the left.
- D** The number of first-time couples in the study is greater than the number of previously married couples in the study.
- E** The interquartile range of length of time for first-time couples is greater than that of previously married couples.



To gather data for a statistics project, a student asked 10 friends how many hours of sleep they got on the previous night. The data are shown in the following list.

7	6	5	9	3	4	7	9	5	8
---	---	---	---	---	---	---	---	---	---

What is the interquartile range (IQR) of the number of hours of sleep shown in the list?

- A** 3 hours
- B** 4 hours
- C** 6 hours
- D** 6.3 hours
- E** 6.5 hours



The distribution of 27 salaries at a small company has mean \$35,000 and standard deviation \$2,000. Suppose the company hires a 28th employee at a salary of \$120,000. Which of the following claims about the new salary distribution is supported?

- I. The median is not likely to change.
- II. The range is not likely to change.
- III. The mean is likely to increase.

- A** I only
- B** III only
- C** I and II only
- D** I and III only
- E** I, II, and III



The following list shows the number of goals scored by a soccer team in each of 9 games.

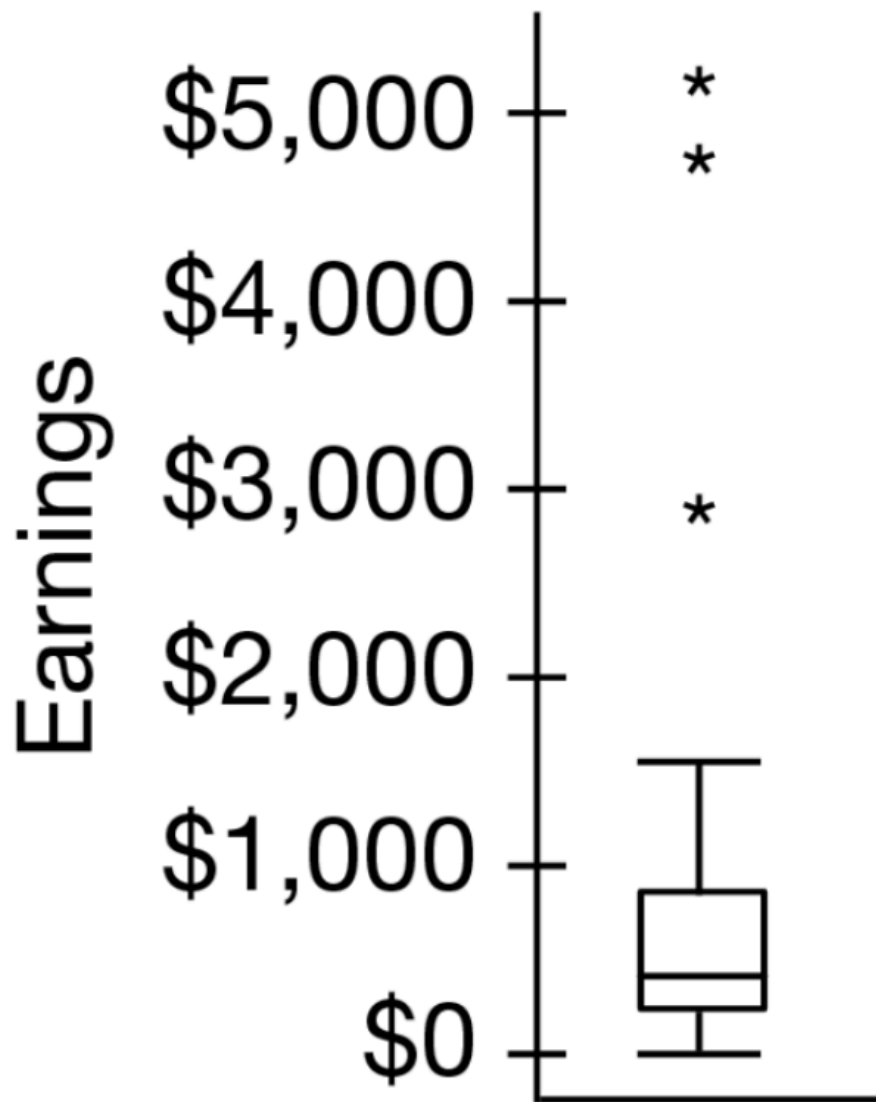
0	0	1	1	1	3	3	4	5
---	---	---	---	---	---	---	---	---

How does the median number of goals scored compare with the mean number of goals scored?

- A** The median is equal to the mean.
- B** The median is less than the mean by 1.
- C** The median is greater than the mean by 1.
- D** The median is less than the mean by 2.
- E** The median is greater than the mean by 2.



The following boxplot summarizes the earnings made on one day at 45 movie theaters. Which of the following best compares the median movie theater earnings with the mean movie theater earnings?



- A The median and mean are equal because the distribution is likely symmetric.
- B The median and mean are equal because the distribution is likely skewed to the right.
- C The median is less than the mean because the distribution is likely symmetric.
- D The median is less than the mean because the distribution is likely skewed to the right.
- E The median is less than the mean because the distribution is likely skewed to the left.



The time, in minutes, it took each of 11 students to complete a puzzle was recorded and is shown in the following list.

9, 17, 20, 21, 27, 29, 30, 31, 32, 35, 58

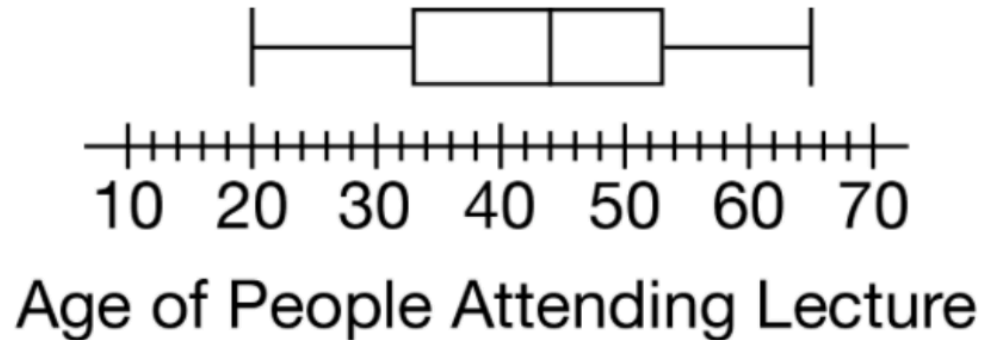
One of the students who completed the puzzle claimed that there were two outliers in the data set. Based on the $1.5 \times \text{IQR}$ rule for outliers, is there evidence to support the student's claim?

- A** Yes, there are two outliers. One outlier is 9 minutes and the other outlier is 58 minutes.
- B** No, there is only one outlier at 9 minutes.
- C** No, there is only one outlier at 58 minutes.
- D** No, there are three outliers. One outlier is 9 minutes, one outlier is 35 minutes, and one outlier is 58 minutes.
- E** No, there are no outliers.



The following table shows statistics on the ages, in years, of the people who attended a lecture last week. The data are summarized in the boxplot shown.

N	Mean	StDev	Minimum	Q1	Median	Q3	Maximum
45	43	12	20	33	44	53	65



Which of the following statements is supported by the table and boxplot?

- A** The range of the distribution is 20 years.
- B** There were 43 people who attended the lecture.
- C** At least 50% of the people who attended the lecture were 43 years or younger.
- D** At least 75% of the people who attended the lecture were age 53 years or younger.
- E** At least 25% of the people who attended the lecture were 33 years old.



The following table shows summary statistics, in thousands, for the number of electrical workers and the number of concrete workers in the construction industry each month for the past 5 years.

Type of Worker	Minimum	First Quartile	Median	Third Quartile	Maximum
Electrical	239	278	307	320	330
Concrete	186	262	290	308	335

Based on the $1.5 \times \text{IQR}$ rule for outliers, which of the following statements is a correct comparison of the two distributions?

- A The electrical and concrete distributions both have high outliers.
- B The electrical and concrete distributions both have lower outliers.
- C Neither the electrical distribution nor concrete distribution has outliers.
- D The concrete distribution has at least one lower outlier, and the electrical distribution has no lower outliers.
- E The concrete distribution has at least one high outlier, and the electrical distribution has no high outliers.



Which of the following can be reasonably modeled by a normal distribution?

- A** The favorite colors of students in a kindergarten class
- B** The heights of tomato plants that were all planted on the same day ✓
- C** The percent of employees from a company who attended a company retreat
- D** The average number of siblings of all students at a particular high school
- E** The parental guidance ratings (G, PG, PG-13, R) of movies filmed in 2019

The following table shows the number of miles a hiker walked on a trail each day for 6 days.

Day	1	2	3	4	5	6
Number of Miles	8	5	7	2	9	8

What was the mean number of miles the hiker walked for the 6 days?

A 3.5

B 4.5

C 6.5

D 7.5

E 8



The distribution of the number of transactions performed at a bank each day is approximately normal with mean 478 transactions and standard deviation 64 transactions. Which of the following is closest to the proportion of daily transactions greater than 350 ?

A 0.023

B 0.046

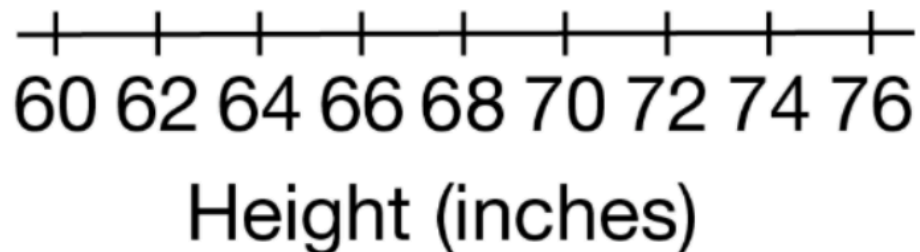

C 0.477

D 0.954

E 0.977



The following boxplot summarizes the heights of a group of people who participate in a weekend biking club.




Which of the following statements is supported by the boxplot?

- A** The mean height is 67 inches.
- B** The number of people with height at least 70 inches is greater than the number of people with height at most 62 inches.
- C** The number of people with height at least 67 inches is less than the number of people with height at most 67 inches.
- D** Approximately 50% of the people have a height between 62 inches and 70 inches.
- E** Approximately 25% of the people have a height greater than 62 inches.



A family has two cats named Gordo and Flaco. Gordo weighs 15 pounds and Flaco weighs 8 pounds. A cat's weight is classified as unhealthy if the weight is located in the top 5% or bottom 5% of all cat weights. The distribution of cat weights is approximately normal with mean 9.5 pounds and standard deviation 1.5 pounds. Which of the following is the best description of Gordo's and Flaco's weights?

- A** Neither Gordo's nor Flaco's weight is classified as unhealthy.
- B** Gordo's weight is classified as unhealthy but Flaco's weight is not. 
- C** Flaco's weight is classified as unhealthy but Gordo's weight is not.
- D** Flaco's weight and Gordo's weight are both classified as unhealthy.
- E** The classification of weight cannot be determined without more information.